

# Kompecabezas de sumas y restas

Resuelve las operaciones y pega en el lugar que corresponda la imagen con el resultado.

$$\begin{array}{r} 150 \\ - 48 \\ \hline \end{array}$$

$$\begin{array}{r} 75 \\ + 24 \\ \hline \end{array}$$

$$\begin{array}{r} 176 \\ - 12 \\ \hline \end{array}$$

$$\begin{array}{r} 25 \\ + 15 \\ \hline \end{array}$$

$$\begin{array}{r} 278 \\ - 105 \\ \hline \end{array}$$

$$\begin{array}{r} 27 \\ + 8 \\ \hline \end{array}$$

$$\begin{array}{r} 309 \\ - 132 \\ \hline \end{array}$$

$$\begin{array}{r} 15 \\ + 17 \\ \hline \end{array}$$

$$\begin{array}{r} 845 \\ - 679 \\ \hline \end{array}$$

$$\begin{array}{r} 61 \\ + 23 \\ \hline \end{array}$$

$$\begin{array}{r} 237 \\ - 69 \\ \hline \end{array}$$


$$\begin{array}{r} 65 \\ + 33 \\ \hline \end{array}$$


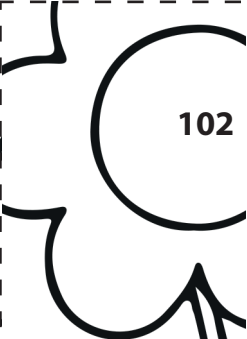


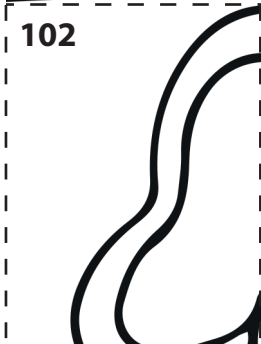











$$\begin{array}{r} 470 \\ - 301 \\ \hline \end{array}$$

$$\begin{array}{r} 48 \\ + 47 \\ \hline \end{array}$$

$$\begin{array}{r} 885 \\ - 723 \\ \hline \end{array}$$

$$\begin{array}{r} 50 \\ + 33 \\ \hline \end{array}$$



 95	 102	 173	 83
 102	 98	 84	 35
 164	 169	 169	 169
 99	 162	 32	 40
		166	168

# Rompecabezas de sumas y restas

Resuelve las operaciones y pega en el lugar que corresponda la imagen con el resultado.

$$\begin{array}{r} 200 \\ - 99 \\ \hline \end{array}$$

$$\begin{array}{r} 89 \\ + 11 \\ \hline \end{array}$$

$$\begin{array}{r} 287 \\ - 122 \\ \hline \end{array}$$

$$\begin{array}{r} 15 \\ + 17 \\ \hline \end{array}$$

$$\begin{array}{r} 150 \\ - 48 \\ \hline \end{array}$$

$$\begin{array}{r} 53 \\ + 35 \\ \hline \end{array}$$

$$\begin{array}{r} 477 \\ - 302 \\ \hline \end{array}$$

$$\begin{array}{r} 12 \\ + 19 \\ \hline \end{array}$$

$$\begin{array}{r} 168 \\ - 50 \\ \hline \end{array}$$

$$\begin{array}{r} 81 \\ + 10 \\ \hline \end{array}$$

$$\begin{array}{r} 307 \\ - 127 \\ \hline \end{array}$$


$$\begin{array}{r} 13 \\ + 16 \\ \hline \end{array}$$

$$\begin{array}{r} 120 \\ - 12 \\ \hline \end{array}$$

$$\begin{array}{r} 80 \\ + 10 \\ \hline \end{array}$$

$$\begin{array}{r} 300 \\ - 121 \\ \hline \end{array}$$

$$\begin{array}{r} 15 \\ + 15 \\ \hline \end{array}$$



# Rompecabezas de sumas y restas

Resuelve las operaciones y pega en el lugar que corresponda la imagen con el resultado.

$$\begin{array}{r} 160 \\ - 21 \\ \hline \end{array}$$

$$\begin{array}{r} 60 \\ + 61 \\ \hline \end{array}$$

$$\begin{array}{r} 400 \\ - 359 \\ \hline \end{array}$$

$$\begin{array}{r} 68 \\ + 62 \\ \hline \end{array}$$

$$\begin{array}{r} 180 \\ - 20 \\ \hline \end{array}$$

$$\begin{array}{r} 70 \\ + 70 \\ \hline \end{array}$$

$$\begin{array}{r} 200 \\ - 158 \\ \hline \end{array}$$

$$\begin{array}{r} 53 \\ + 69 \\ \hline \end{array}$$

$$\begin{array}{r} 200 \\ - 157 \\ \hline \end{array}$$

$$\begin{array}{r} 58 \\ + 66 \\ \hline \end{array}$$

$$\begin{array}{r} 300 \\ - 264 \\ \hline \end{array}$$

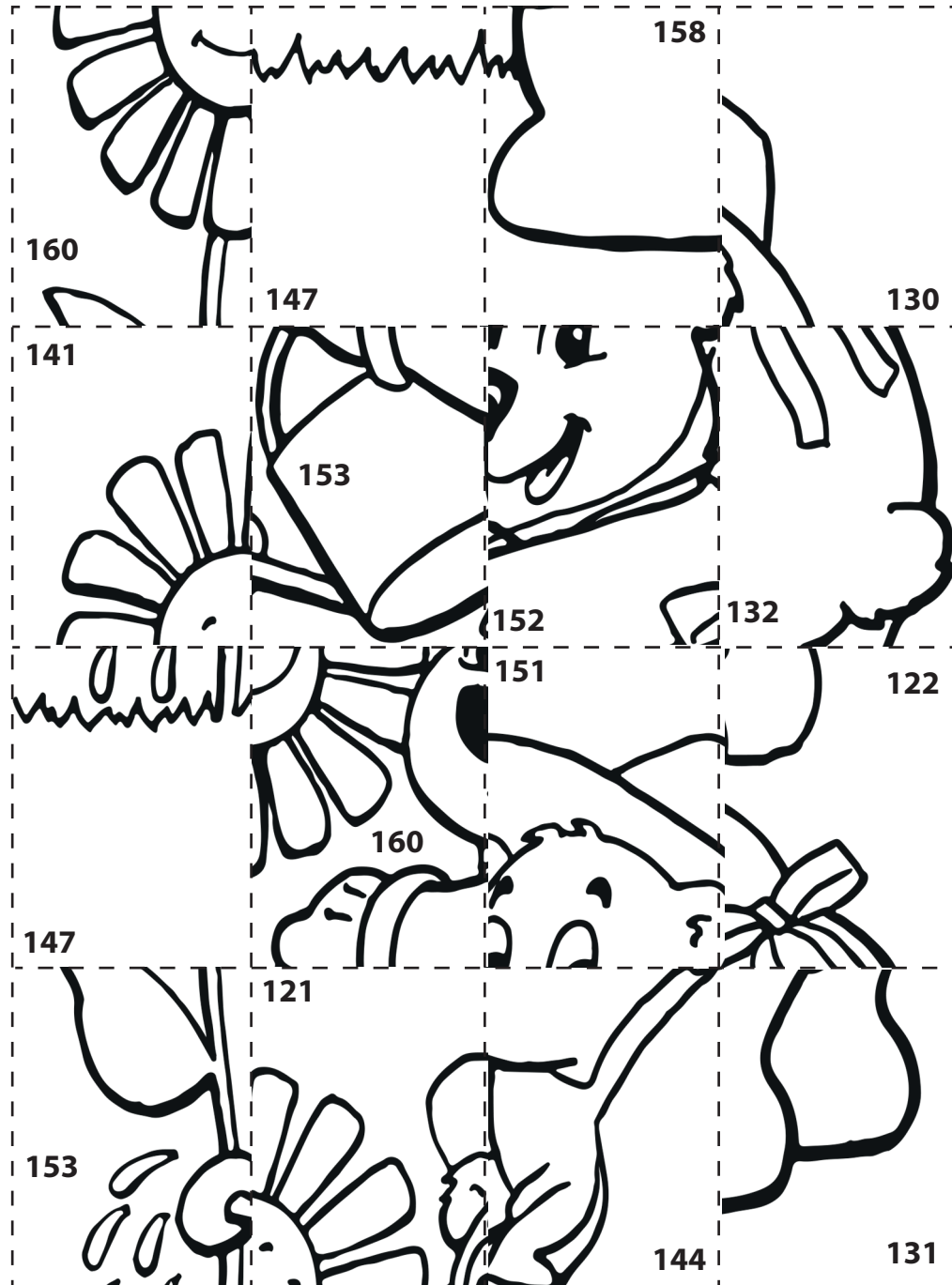
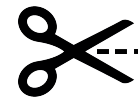
$$\begin{array}{r} 63 \\ + 69 \\ \hline \end{array}$$

$$\begin{array}{r} 300 \\ - 263 \\ \hline \end{array}$$

$$\begin{array}{r} 68 \\ + 68 \\ \hline \end{array}$$

$$\begin{array}{r} 190 \\ - 42 \\ \hline \end{array}$$

$$\begin{array}{r} 96 \\ + 25 \\ \hline \end{array}$$



# Rompecabezas de sumas y restas

Resuelve las operaciones y pega en el lugar que corresponda la imagen con el resultado.

$$\begin{array}{r} 80 \\ - 20 \\ \hline \end{array}$$

$$\begin{array}{r} 68 \\ + 70 \\ \hline \end{array}$$

$$\begin{array}{r} 883 \\ - 700 \\ \hline \end{array}$$

$$\begin{array}{r} 48 \\ + 47 \\ \hline \end{array}$$

$$\begin{array}{r} 90 \\ - 40 \\ \hline \end{array}$$

$$\begin{array}{r} 45 \\ + 80 \\ \hline \end{array}$$

$$\begin{array}{r} 593 \\ - 400 \\ \hline \end{array}$$

$$\begin{array}{r} 61 \\ + 23 \\ \hline \end{array}$$

$$\begin{array}{r} 85 \\ - 32 \\ \hline \end{array}$$

$$\begin{array}{r} 20 \\ + 21 \\ \hline \end{array}$$

$$\begin{array}{r} 179 \\ - 25 \\ \hline \end{array}$$

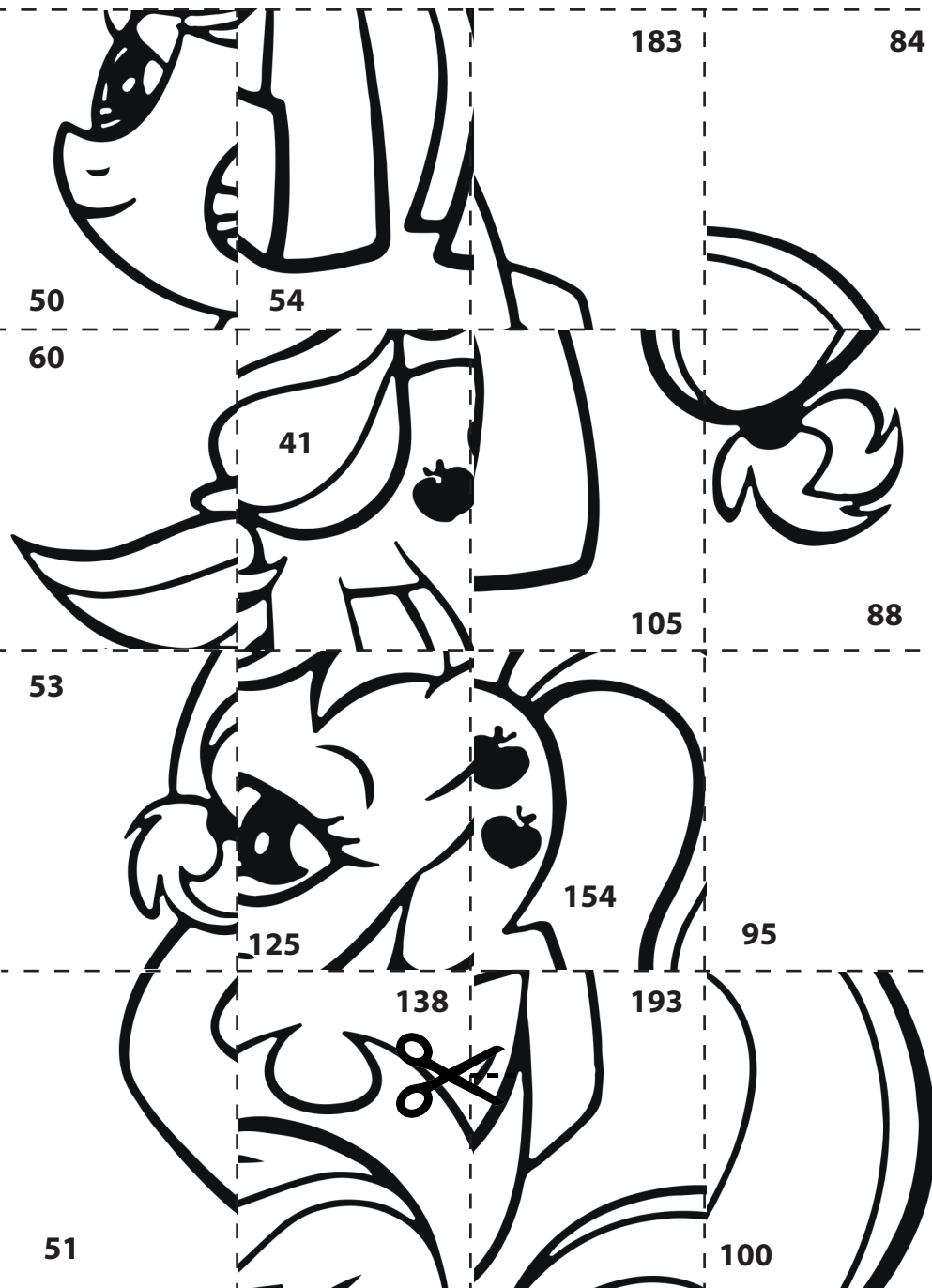
$$\begin{array}{r} 89 \\ + 11 \\ \hline \end{array}$$

$$\begin{array}{r} 53 \\ - 12 \\ \hline \end{array}$$

$$\begin{array}{r} 35 \\ + 14 \\ \hline \end{array}$$

$$\begin{array}{r} 130 \\ - 25 \\ \hline \end{array}$$

$$\begin{array}{r} 53 \\ + 35 \\ \hline \end{array}$$



# Rompecabezas de sumas y restas

Resuelve las operaciones y pega en el lugar que corresponda la imagen con el resultado.

$$\begin{array}{r} 117 \\ - 10 \\ \hline \end{array}$$

$$\begin{array}{r} 50 \\ + 33 \\ \hline \end{array}$$

$$\begin{array}{r} 99 \\ - 32 \\ \hline \end{array}$$

$$\begin{array}{r} 99 \\ + 30 \\ \hline \end{array}$$

$$\begin{array}{r} 118 \\ - 15 \\ \hline \end{array}$$

$$\begin{array}{r} 83 \\ + 13 \\ \hline \end{array}$$

$$\begin{array}{r} 83 \\ - 15 \\ \hline \end{array}$$

$$\begin{array}{r} 121 \\ + 10 \\ \hline \end{array}$$

$$\begin{array}{r} 120 \\ - 16 \\ \hline \end{array}$$

$$\begin{array}{r} 65 \\ + 33 \\ \hline \end{array}$$

$$\begin{array}{r} 102 \\ - 23 \\ \hline \end{array}$$

$$\begin{array}{r} 58 \\ + 68 \\ \hline \end{array}$$

$$\begin{array}{r} 130 \\ - 44 \\ \hline \end{array}$$

$$\begin{array}{r} 80 \\ + 20 \\ \hline \end{array}$$

$$\begin{array}{r} 111 \\ - 42 \\ \hline \end{array}$$

$$\begin{array}{r} 121 \\ + 14 \\ \hline \end{array}$$

